

Name: \_\_\_\_\_ Date: \_\_\_\_\_



Can you answer these questions about the mountain range or hills that are closest to your school?

Which county is your school in?

Which range of mountains or hills is closest to your school?

What is the tallest peak in the range? How tall is it?

How far is the tallest peak from your school?

Which county or counties is the range in?

What is the elevation of the land your school stands on?

How much higher is the peak of the mountain or hill than the site of your school?

What is the temperature today at your school?

What is the temperature today in the range of mountains or hills?

What is the average rainfall for this month at your school?

What is the average rainfall for this month in the range of mountains or hills?

Name: \_\_\_\_\_ Date: \_\_\_\_\_



Can you answer these questions about the mountain range or hills that are closest to your school?

Which county is your school in? What is the grid reference of your school?

Which range of mountains or hills is closest to your school? What is its grid reference?

What is the tallest peak in the range? How tall is it? What is its grid reference?

How far is the tallest peak from your school?

Which county or counties is the range in?

What is the elevation of the land your school stands on?

How much higher is the peak of the mountain or hill than the site of your school?

What is the temperature today at your school?

What is the temperature today in the range of mountains or hills?

What is the average rainfall for this month at your school?

What is the average rainfall for this month in the range of mountains or hills?



This table has information about some of the upland areas in England.

Number on map	Range	Highest peak or point	Height	Main rock types
1	Cheviot Hills	The Cheviot	815m	Devonian granite, carboniferous limestone
2	Pennines (North Pennines)	Cross Fell	893m	Carboniferous limestone
3	Pennines (Yorkshire Dales)	Ingleborough	723m	Limestone
4	Pennines (South Pennines)	Boulsworth Hill	571m	Peat bogs, millstone grit
5	Pennines (Peak District)	Kinder Scout	636m	Limestone, gritstone
6	Lake District	Scafell Pike	978m	Ordovician igneous rocks, volcanic rocks
7	Forest of Bowland (also called Bowland Fells)	Ward's Stone	561m	Gritstone
8	North York Moors	Urra Moor	454m	Jurassic limestone, shales, sandstone
9	Shropshire Hills	Brown Clee Hill	540m	Limestone
10	Cotswolds	Cleeve Hill	330m	Limestone
11	Chiltern Hills	Haddington Hill	267m	Chalk
12	North Downs	Botley Hill	267m	Chalk
13	North Wessex Downs	Walbury Hill	297m	Chalk
14	Mendip Hills	Black Down	325m	Limestone
15	Exmoor	Dunkery Beacon	520m	Sedimentary red sandstone
16	Dartmoor	High Willhays	621m	Granite
17	Bodmin Moor	Brown Willy	420m	Granite
	Greensand Ridge	Leith Hill	294m	Greensand, sandstone
	Purbeck Hills (also called Purbeck Ridge)	Swyre Head	208m	Chalk
	Quantock Hills	Will's Neck	384m	Sandstone, sedimentary



This table has information about some of the upland areas in England.

Number on map	Range	County(ies) the upland area is in	Highest peak or point	Grid reference of peak or point
1	Cheviot Hills		The Cheviot	
2	Pennines (North Pennines)		Cross Fell	
3	Pennines (Yorkshire Dales)		Ingleborough	
4	Pennines (South Pennines)		Boulsworth Hill	
5	Pennines (Peak District)		Kinder Scout	
6	Lake District		Scafell Pike	
7	Forest of Bowland (also called Bowland Fells)		Ward's Stone	
8	North York Moors		Urra Moor	
9	Shropshire Hills		Brown Clee Hill	
10	Cotswolds		Cleeve Hill	
11	Chiltern Hills		Haddington Hill	
12	North Downs		Botley Hill	
13	North Wessex Downs		Walbury Hill	
14	Mendip Hills		Black Down	
15	Exmoor		Dunkery Beacon	
16	Dartmoor		High Willhays	
17	Bodmin Moor		Brown Willy	
	Greensand Ridge		Leith Hill	
	Purbeck Hills (also called Purbeck Ridge)		Swyre Head	
	Quantock Hills		Will's Neck	

Name: \_\_\_\_\_ Date: \_\_\_\_\_



Record the information about the vegetation you find at your local upland area here!

## Vegetation

Name	Sketch	Number found	Location	Description

Name: \_\_\_\_\_ Date: \_\_\_\_\_



Record the wildlife you find at your local upland area here!

## Wildlife

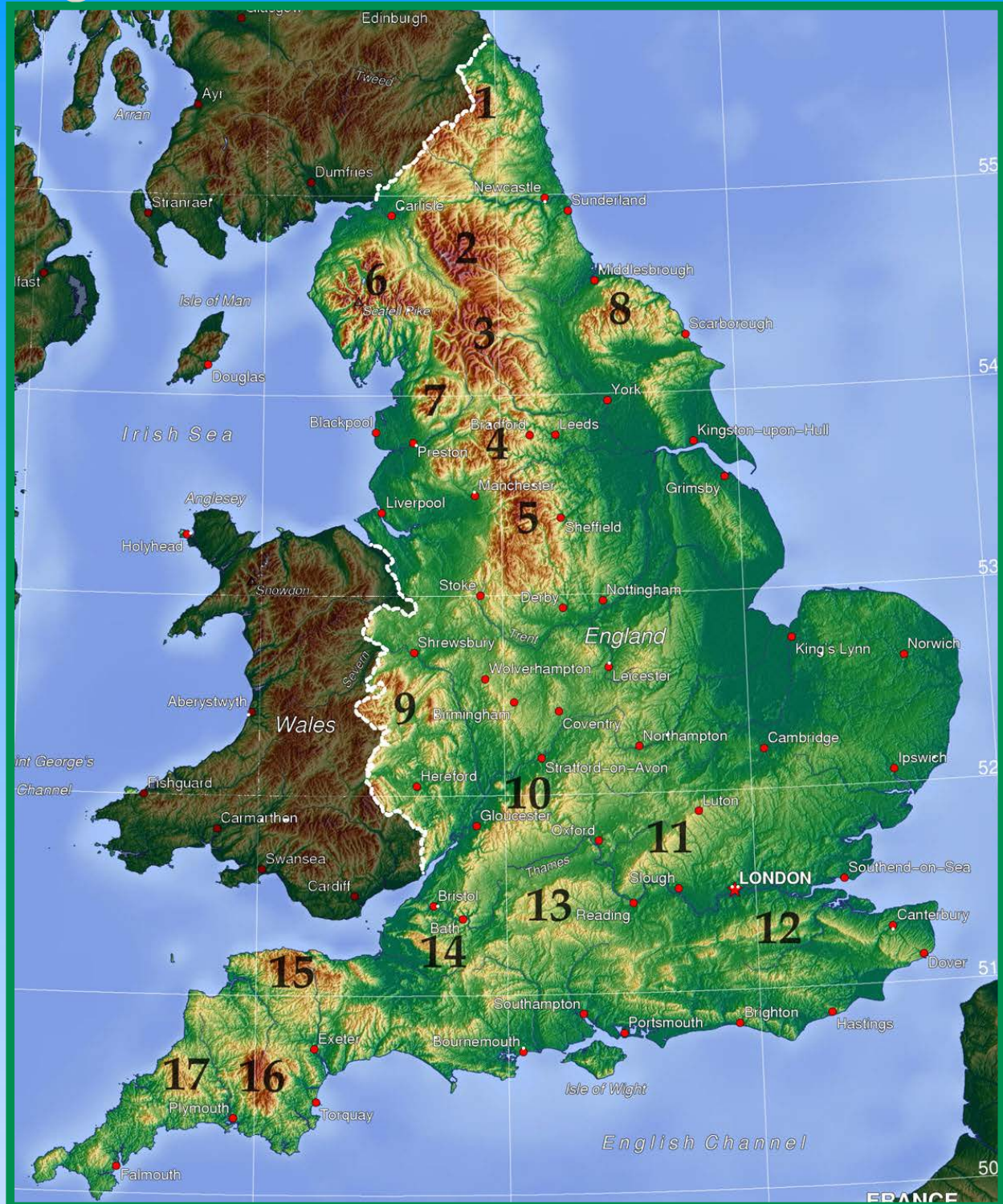
Name	Sketch	Number found	Location	Description







This is a topographic map of England. The largest areas of hills and mountains in England have been numbered. Can you identify them all?

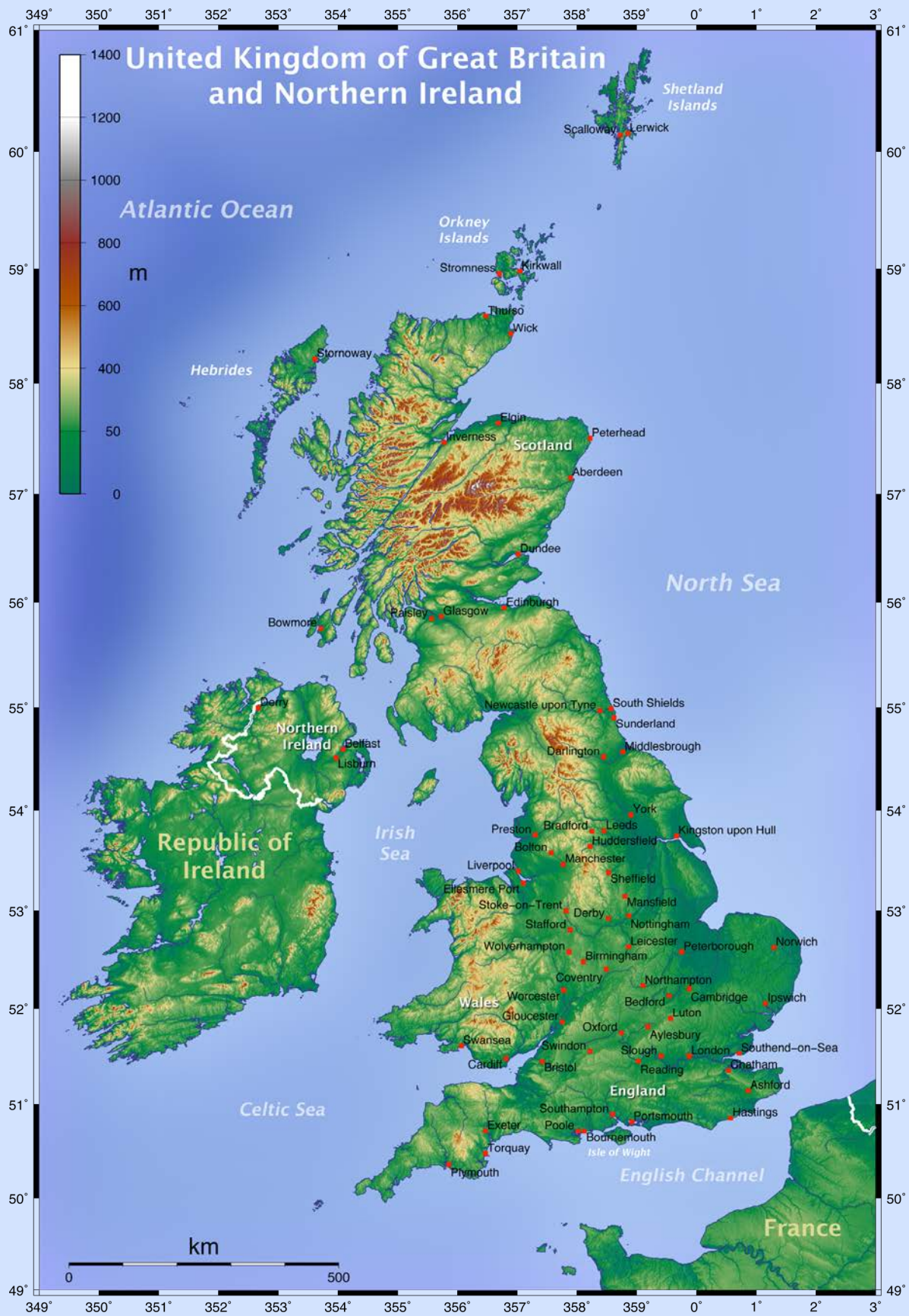


[http://upload.wikimedia.org/wikipedia/commons/6/60/England\\_hill\\_regions.jpg](http://upload.wikimedia.org/wikipedia/commons/6/60/England_hill_regions.jpg)



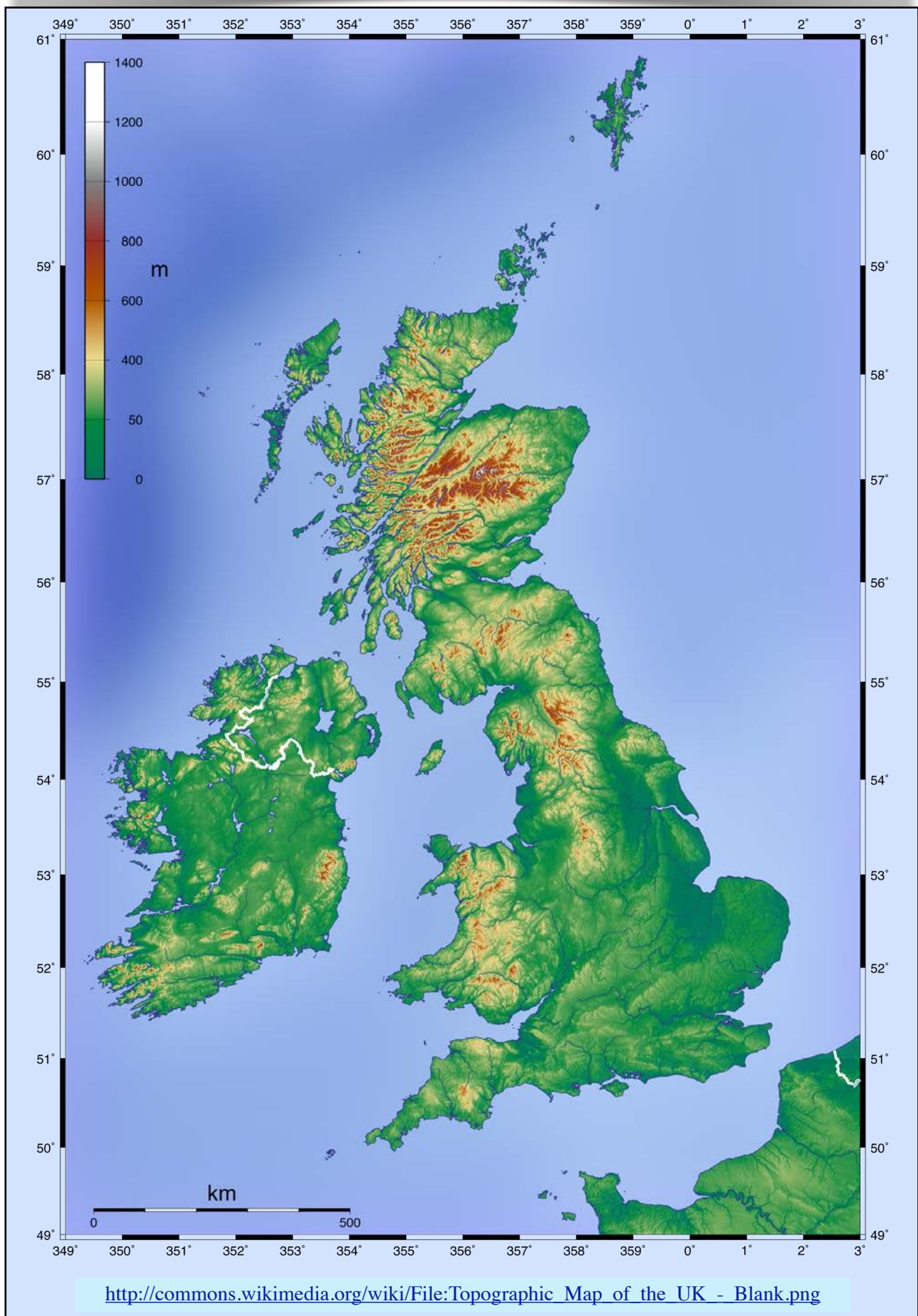


Contains Ordnance Survey data © Crown copyright and database right [2013]



[http://commons.wikimedia.org/wiki/File:Topographic\\_Map\\_of\\_the\\_UK\\_-\\_English.png](http://commons.wikimedia.org/wiki/File:Topographic_Map_of_the_UK_-_English.png)







This is a topographic map of England. It shows the relief of the land. The counties are also marked. How many counties can you name? Which county do you live in?



[http://commons.wikimedia.org/wiki/File:England\\_relief\\_location\\_map.jpg](http://commons.wikimedia.org/wiki/File:England_relief_location_map.jpg)